



NAME: _____




2s 5s 10s


DAZZLE



STAR



VIBE



SCORE

BASELINE

CHECK 1

CHECK 2



BASELINE



Name: _____

Date: _____

1. $6 \times 2 =$ _____

21. $7 \times 10 =$ _____

41. $90 \div 10 =$ _____

2. $2 \times 1 =$ _____

22. $2 \times 7 =$ _____

42. $40 \div 8 =$ _____

3. $8 \times 10 =$ _____

23. $1 \times 5 =$ _____

43. $120 \div 10 =$ _____

4. $10 \times 7 =$ _____

24. $12 \times 10 =$ _____

44. $10 \div 2 =$ _____

5. $6 \times 10 =$ _____

25. $2 \times 4 =$ _____

45. $6 \div 2 =$ _____

6. $8 \times 5 =$ _____

26. $1 \times 5 =$ _____

46. $10 \div 5 =$ _____

7. $1 \times 2 =$ _____

27. $2 \times 6 =$ _____

47. $5 \div 5 =$ _____

8. $7 \times 10 =$ _____

28. $7 \times 2 =$ _____

48. $20 \div 2 =$ _____

9. $12 \times 5 =$ _____

29. $5 \times 10 =$ _____

49. $8 \div 4 =$ _____

10. $1 \times 10 =$ _____

30. $2 \times 10 =$ _____

50. $100 \div 10 =$ _____

11. $2 \times 7 =$ _____

31. $11 \times 10 =$ _____

51. $2 \div 1 =$ _____

12. $2 \times 1 =$ _____

32. $60 \div 12 =$ _____

52. $8 \div 2 =$ _____

13. $10 \times 11 =$ _____

33. $10 \div 5 =$ _____

53. $120 \div 12 =$ _____

14. $7 \times 2 =$ _____

34. $12 \div 6 =$ _____

54. $4 \div 2 =$ _____

15. $5 \times 1 =$ _____

35. $20 \div 10 =$ _____

55. $60 \div 10 =$ _____

16. $7 \times 10 =$ _____

36. $50 \div 5 =$ _____

56. $50 \div 10 =$ _____

17. $10 \times 6 =$ _____

37. $90 \div 10 =$ _____

57. $80 \div 10 =$ _____

18. $3 \times 5 =$ _____

38. $35 \div 5 =$ _____

58. $4 \div 2 =$ _____

19. $5 \times 2 =$ _____

39. $45 \div 5 =$ _____

59. $30 \div 6 =$ _____

20. $2 \times 2 =$ _____

40. $20 \div 2 =$ _____

60. $20 \div 5 =$ _____

SCORE:
(5 minute limit)

/60

TIME TAKEN (optional)

MINUTES SECONDS



Name: _____

Date: _____

MULTIPLICATION 1

Testing 2, 5, 10

1. $1 \times 10 =$ _____

2. $2 \times 5 =$ _____

3. $10 \times 11 =$ _____

4. $5 \times 9 =$ _____

5. $8 \times 5 =$ _____

6. $4 \times 2 =$ _____

7. $5 \times 8 =$ _____

8. $5 \times 7 =$ _____

9. $9 \times 2 =$ _____

10. $10 \times 2 =$ _____

11. $1 \times 2 =$ _____

12. $2 \times 1 =$ _____

13. $12 \times 2 =$ _____

14. $2 \times 3 =$ _____

15. $7 \times 5 =$ _____

16. $8 \times 2 =$ _____

17. $5 \times 7 =$ _____

18. $12 \times 2 =$ _____

19. $5 \times 9 =$ _____

20. $10 \times 5 =$ _____

21. $2 \times 7 =$ _____

22. $1 \times 10 =$ _____

23. $5 \times 11 =$ _____

24. $5 \times 11 =$ _____

25. $2 \times 9 =$ _____

26. $4 \times 5 =$ _____

27. $10 \times 5 =$ _____

28. $10 \times 2 =$ _____

29. $10 \times 1 =$ _____

30. $5 \times 9 =$ _____

31. $3 \times 5 =$ _____

32. $7 \times 5 =$ _____

33. $9 \times 5 =$ _____

34. $2 \times 1 =$ _____

35. $2 \times 11 =$ _____

36. $2 \times 1 =$ _____

37. $5 \times 3 =$ _____

38. $11 \times 5 =$ _____

39. $5 \times 5 =$ _____

40. $5 \times 10 =$ _____

41. $9 \times 2 =$ _____

42. $10 \times 5 =$ _____

43. $2 \times 12 =$ _____

44. $12 \times 10 =$ _____

45. $2 \times 5 =$ _____

46. $12 \times 10 =$ _____

47. $2 \times 3 =$ _____

48. $10 \times 11 =$ _____

49. $5 \times 7 =$ _____

50. $5 \times 8 =$ _____

51. $7 \times 5 =$ _____

52. $5 \times 5 =$ _____

53. $12 \times 10 =$ _____

54. $1 \times 2 =$ _____

55. $7 \times 5 =$ _____

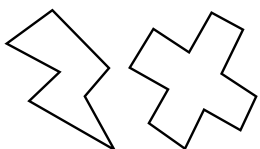
56. $5 \times 1 =$ _____

57. $4 \times 10 =$ _____

58. $12 \times 10 =$ _____

59. $2 \times 3 =$ _____

60. $2 \times 9 =$ _____



SCORE:

Grown-ups:
Can learners spot links between neighbouring questions?



Name: _____

MISSING NUMBER 1

Testing 2, 5, 10

Date: _____

1. $10 \times \underline{\quad} = 80$

21. $5 \times \underline{\quad} = 5$

41. $10 \times \underline{\quad} = 100$

2. $\underline{\quad} \times 8 = 40$

22. $10 \times \underline{\quad} = 120$

42. $5 \times \underline{\quad} = 30$

3. $\underline{\quad} \times 10 = 40$

23. $5 \times \underline{\quad} = 30$

43. $7 \times \underline{\quad} = 14$

4. $3 \times \underline{\quad} = 30$

24. $\underline{\quad} \times 10 = 40$

44. $\underline{\quad} \times 12 = 120$

5. $\underline{\quad} \times 5 = 10$

25. $\underline{\quad} \times 10 = 120$

45. $10 \times \underline{\quad} = 20$

6. $\underline{\quad} \times 3 = 30$

26. $2 \times \underline{\quad} = 10$

46. $12 \times \underline{\quad} = 60$

7. $\underline{\quad} \times 9 = 18$

27. $2 \times \underline{\quad} = 10$

47. $\underline{\quad} \times 2 = 10$

8. $\underline{\quad} \times 9 = 18$

28. $5 \times \underline{\quad} = 55$

48. $7 \times \underline{\quad} = 35$

9. $2 \times \underline{\quad} = 10$

29. $\underline{\quad} \times 5 = 25$

49. $\underline{\quad} \times 5 = 50$

10. $\underline{\quad} \times 7 = 14$

30. $2 \times \underline{\quad} = 4$

50. $5 \times \underline{\quad} = 50$

11. $2 \times \underline{\quad} = 20$

31. $\underline{\quad} \times 5 = 50$

51. $\underline{\quad} \times 10 = 20$

12. $2 \times \underline{\quad} = 4$

32. $\underline{\quad} \times 2 = 4$

52. $\underline{\quad} \times 10 = 20$

13. $2 \times \underline{\quad} = 24$

33. $4 \times \underline{\quad} = 20$

53. $10 \times \underline{\quad} = 100$

14. $5 \times \underline{\quad} = 55$

34. $\underline{\quad} \times 2 = 10$

54. $2 \times \underline{\quad} = 10$

15. $2 \times \underline{\quad} = 12$

35. $8 \times \underline{\quad} = 40$

55. $7 \times \underline{\quad} = 35$

16. $2 \times \underline{\quad} = 20$

36. $10 \times \underline{\quad} = 110$

56. $\underline{\quad} \times 7 = 35$

17. $\underline{\quad} \times 11 = 22$

37. $\underline{\quad} \times 10 = 70$

57. $12 \times \underline{\quad} = 120$

18. $\underline{\quad} \times 2 = 14$

38. $10 \times \underline{\quad} = 110$

58. $11 \times \underline{\quad} = 22$

19. $10 \times \underline{\quad} = 50$

39. $\underline{\quad} \times 6 = 12$

59. $\underline{\quad} \times 10 = 100$

20. $10 \times \underline{\quad} = 120$

40. $5 \times \underline{\quad} = 30$

60. $\underline{\quad} \times 10 = 80$



SCORE:

Grown-ups:

Can learners spot links between neighbouring questions?



Name: _____

Date: _____

DIVISION 1

Testing 2, 5, 10

1. $20 \div 4 =$ _____

21. $35 \div 5 =$ _____

41. $30 \div 10 =$ _____

2. $70 \div 10 =$ _____

22. $10 \div 2 =$ _____

42. $15 \div 5 =$ _____

3. $18 \div 9 =$ _____

23. $5 \div 1 =$ _____

43. $60 \div 12 =$ _____

4. $100 \div 10 =$ _____

24. $60 \div 10 =$ _____

44. $40 \div 8 =$ _____

5. $10 \div 1 =$ _____

25. $40 \div 10 =$ _____

45. $25 \div 5 =$ _____

6. $110 \div 10 =$ _____

26. $14 \div 7 =$ _____

46. $16 \div 8 =$ _____

7. $30 \div 3 =$ _____

27. $4 \div 2 =$ _____

47. $18 \div 2 =$ _____

8. $35 \div 5 =$ _____

28. $14 \div 7 =$ _____

48. $2 \div 2 =$ _____

9. $24 \div 12 =$ _____

29. $12 \div 6 =$ _____

49. $50 \div 10 =$ _____

10. $35 \div 5 =$ _____

30. $20 \div 5 =$ _____

50. $5 \div 1 =$ _____

11. $18 \div 9 =$ _____

31. $14 \div 2 =$ _____

51. $14 \div 2 =$ _____

12. $45 \div 5 =$ _____

32. $2 \div 1 =$ _____

52. $12 \div 6 =$ _____

13. $35 \div 7 =$ _____

33. $70 \div 7 =$ _____

53. $50 \div 10 =$ _____

14. $120 \div 12 =$ _____

34. $15 \div 3 =$ _____

54. $2 \div 2 =$ _____

15. $30 \div 3 =$ _____

35. $100 \div 10 =$ _____

55. $80 \div 8 =$ _____

16. $18 \div 9 =$ _____

36. $10 \div 10 =$ _____

56. $15 \div 5 =$ _____

17. $90 \div 9 =$ _____

37. $35 \div 5 =$ _____

57. $14 \div 7 =$ _____

18. $10 \div 2 =$ _____

38. $45 \div 5 =$ _____

58. $6 \div 2 =$ _____

19. $10 \div 2 =$ _____

39. $80 \div 8 =$ _____

59. $60 \div 12 =$ _____

20. $40 \div 4 =$ _____

40. $20 \div 10 =$ _____

60. $16 \div 2 =$ _____



SCORE:

Grown-ups:
Can learners spot links between neighbouring questions?





CHECK 1



Name: _____

Date: _____

1. $5 \times 10 =$ _____

21. $4 \times 2 =$ _____

41. $60 \div 6 =$ _____

2. $7 \times 5 =$ _____

22. $8 \times 5 =$ _____

42. $18 \div 9 =$ _____

3. $9 \times 10 =$ _____

23. $5 \times 6 =$ _____

43. $100 \div 10 =$ _____

4. $7 \times 10 =$ _____

24. $3 \times 10 =$ _____

44. $10 \div 5 =$ _____

5. $6 \times 10 =$ _____

25. $2 \times 12 =$ _____

45. $35 \div 7 =$ _____

6. $4 \times 10 =$ _____

26. $11 \times 2 =$ _____

46. $25 \div 5 =$ _____

7. $9 \times 5 =$ _____

27. $6 \times 5 =$ _____

47. $10 \div 5 =$ _____

8. $5 \times 10 =$ _____

28. $6 \times 5 =$ _____

48. $10 \div 2 =$ _____

9. $1 \times 5 =$ _____

29. $3 \times 2 =$ _____

49. $50 \div 5 =$ _____

10. $6 \times 2 =$ _____

30. $5 \times 12 =$ _____

50. $60 \div 10 =$ _____

11. $2 \times 2 =$ _____

31. $5 \times 4 =$ _____

51. $10 \div 2 =$ _____

12. $10 \times 8 =$ _____

32. $4 \div 2 =$ _____

52. $20 \div 4 =$ _____

13. $5 \times 5 =$ _____

33. $18 \div 2 =$ _____

53. $60 \div 10 =$ _____

14. $5 \times 9 =$ _____

34. $10 \div 10 =$ _____

54. $6 \div 3 =$ _____

15. $2 \times 11 =$ _____

35. $12 \div 2 =$ _____

55. $14 \div 7 =$ _____

16. $10 \times 12 =$ _____

36. $55 \div 11 =$ _____

56. $110 \div 10 =$ _____

17. $9 \times 10 =$ _____

37. $100 \div 10 =$ _____

57. $50 \div 5 =$ _____

18. $10 \times 3 =$ _____

38. $10 \div 2 =$ _____

58. $16 \div 2 =$ _____

19. $5 \times 12 =$ _____

39. $8 \div 4 =$ _____

59. $90 \div 9 =$ _____

20. $2 \times 6 =$ _____

40. $8 \div 4 =$ _____

60. $8 \div 2 =$ _____

SCORE:
(5 minute limit)

/60

TIME TAKEN (optional)

MINUTES SECONDS



Name: _____

Date: _____

MULTIPLICATION 2

Testing 2, 5, 10

1. $6 \times 10 =$ _____

2. $4 \times 2 =$ _____

3. $8 \times 10 =$ _____

4. $10 \times 10 =$ _____

5. $5 \times 2 =$ _____

6. $10 \times 4 =$ _____

7. $10 \times 5 =$ _____

8. $5 \times 11 =$ _____

9. $9 \times 5 =$ _____

10. $4 \times 2 =$ _____

11. $12 \times 2 =$ _____

12. $5 \times 3 =$ _____

13. $5 \times 7 =$ _____

14. $2 \times 3 =$ _____

15. $10 \times 2 =$ _____

16. $5 \times 5 =$ _____

17. $5 \times 12 =$ _____

18. $2 \times 7 =$ _____

19. $2 \times 7 =$ _____

20. $5 \times 1 =$ _____

21. $10 \times 12 =$ _____

22. $12 \times 5 =$ _____

23. $10 \times 5 =$ _____

24. $5 \times 9 =$ _____

25. $6 \times 10 =$ _____

26. $10 \times 2 =$ _____

27. $10 \times 2 =$ _____

28. $5 \times 4 =$ _____

29. $2 \times 7 =$ _____

30. $6 \times 5 =$ _____

31. $3 \times 2 =$ _____

32. $2 \times 8 =$ _____

33. $5 \times 9 =$ _____

34. $11 \times 2 =$ _____

35. $10 \times 5 =$ _____

36. $10 \times 1 =$ _____

37. $2 \times 2 =$ _____

38. $2 \times 8 =$ _____

39. $2 \times 4 =$ _____

40. $10 \times 3 =$ _____

41. $2 \times 10 =$ _____

42. $3 \times 2 =$ _____

43. $1 \times 2 =$ _____

44. $5 \times 2 =$ _____

45. $1 \times 2 =$ _____

46. $10 \times 6 =$ _____

47. $5 \times 4 =$ _____

48. $2 \times 7 =$ _____

49. $5 \times 10 =$ _____

50. $12 \times 2 =$ _____

51. $2 \times 5 =$ _____

52. $10 \times 1 =$ _____

53. $10 \times 10 =$ _____

54. $8 \times 2 =$ _____

55. $10 \times 2 =$ _____

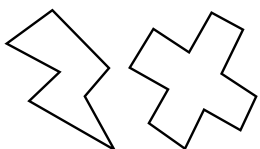
56. $5 \times 3 =$ _____

57. $9 \times 5 =$ _____

58. $5 \times 1 =$ _____

59. $2 \times 8 =$ _____

60. $8 \times 10 =$ _____



SCORE:

Grown-ups:
Can learners spot links between neighbouring questions?



Name: _____

MISSING NUMBER 2

Date: _____

Testing 2, 5, 10

1. $10 \times \underline{\quad} = 60$

21. $\underline{\quad} \times 2 = 2$

41. $2 \times \underline{\quad} = 14$

2. $3 \times \underline{\quad} = 15$

22. $7 \times \underline{\quad} = 35$

42. $2 \times \underline{\quad} = 2$

3. $8 \times \underline{\quad} = 40$

23. $2 \times \underline{\quad} = 10$

43. $9 \times \underline{\quad} = 18$

4. $\underline{\quad} \times 2 = 12$

24. $1 \times \underline{\quad} = 10$

44. $8 \times \underline{\quad} = 40$

5. $\underline{\quad} \times 8 = 16$

25. $\underline{\quad} \times 2 = 20$

45. $3 \times \underline{\quad} = 15$

6. $\underline{\quad} \times 5 = 10$

26. $\underline{\quad} \times 10 = 90$

46. $\underline{\quad} \times 5 = 25$

7. $2 \times \underline{\quad} = 20$

27. $\underline{\quad} \times 1 = 5$

47. $8 \times \underline{\quad} = 16$

8. $1 \times \underline{\quad} = 5$

28. $11 \times \underline{\quad} = 110$

48. $\underline{\quad} \times 2 = 8$

9. $11 \times \underline{\quad} = 110$

29. $\underline{\quad} \times 10 = 20$

49. $5 \times \underline{\quad} = 10$

10. $5 \times \underline{\quad} = 45$

30. $10 \times \underline{\quad} = 100$

50. $4 \times \underline{\quad} = 40$

11. $\underline{\quad} \times 2 = 2$

31. $10 \times \underline{\quad} = 20$

51. $10 \times \underline{\quad} = 40$

12. $9 \times \underline{\quad} = 18$

32. $12 \times \underline{\quad} = 120$

52. $8 \times \underline{\quad} = 80$

13. $\underline{\quad} \times 10 = 50$

33. $4 \times \underline{\quad} = 8$

53. $9 \times \underline{\quad} = 18$

14. $5 \times \underline{\quad} = 55$

34. $\underline{\quad} \times 4 = 8$

54. $\underline{\quad} \times 10 = 10$

15. $\underline{\quad} \times 10 = 120$

35. $\underline{\quad} \times 1 = 2$

55. $10 \times \underline{\quad} = 80$

16. $\underline{\quad} \times 5 = 60$

36. $2 \times \underline{\quad} = 24$

56. $9 \times \underline{\quad} = 90$

17. $5 \times \underline{\quad} = 40$

37. $\underline{\quad} \times 7 = 70$

57. $10 \times \underline{\quad} = 90$

18. $\underline{\quad} \times 10 = 40$

38. $2 \times \underline{\quad} = 20$

58. $5 \times \underline{\quad} = 5$

19. $5 \times \underline{\quad} = 10$

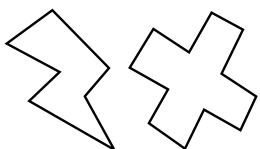
39. $5 \times \underline{\quad} = 10$

59. $\underline{\quad} \times 3 = 15$

20. $10 \times \underline{\quad} = 10$

40. $10 \times \underline{\quad} = 70$

60. $\underline{\quad} \times 2 = 14$



SCORE:

Grown-ups:
Can learners spot links between neighbouring questions?



Name: _____

Date: _____

DIVISION 2

Testing 2, 5, 10

1. $5 \div 5 =$ _____

2. $40 \div 8 =$ _____

3. $5 \div 1 =$ _____

4. $16 \div 2 =$ _____

5. $55 \div 11 =$ _____

6. $2 \div 2 =$ _____

7. $4 \div 2 =$ _____

8. $35 \div 7 =$ _____

9. $10 \div 2 =$ _____

10. $25 \div 5 =$ _____

11. $5 \div 5 =$ _____

12. $100 \div 10 =$ _____

13. $10 \div 5 =$ _____

14. $10 \div 5 =$ _____

15. $10 \div 2 =$ _____

16. $120 \div 12 =$ _____

17. $50 \div 10 =$ _____

18. $30 \div 5 =$ _____

19. $50 \div 10 =$ _____

20. $20 \div 2 =$ _____

21. $55 \div 5 =$ _____

22. $12 \div 2 =$ _____

23. $70 \div 7 =$ _____

24. $2 \div 1 =$ _____

25. $12 \div 2 =$ _____

26. $8 \div 4 =$ _____

27. $4 \div 2 =$ _____

28. $120 \div 12 =$ _____

29. $12 \div 6 =$ _____

30. $90 \div 10 =$ _____

31. $30 \div 6 =$ _____

32. $20 \div 4 =$ _____

33. $10 \div 5 =$ _____

34. $30 \div 6 =$ _____

35. $6 \div 3 =$ _____

36. $20 \div 10 =$ _____

37. $35 \div 7 =$ _____

38. $100 \div 10 =$ _____

39. $110 \div 10 =$ _____

40. $40 \div 5 =$ _____

41. $100 \div 10 =$ _____

42. $90 \div 9 =$ _____

43. $60 \div 12 =$ _____

44. $20 \div 5 =$ _____

45. $60 \div 6 =$ _____

46. $15 \div 5 =$ _____

47. $80 \div 8 =$ _____

48. $22 \div 2 =$ _____

49. $55 \div 5 =$ _____

50. $40 \div 5 =$ _____

51. $60 \div 6 =$ _____

52. $4 \div 2 =$ _____

53. $40 \div 4 =$ _____

54. $14 \div 7 =$ _____

55. $10 \div 5 =$ _____

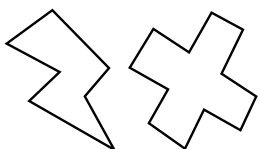
56. $70 \div 7 =$ _____

57. $20 \div 5 =$ _____

58. $55 \div 11 =$ _____

59. $110 \div 10 =$ _____

60. $20 \div 2 =$ _____



SCORE:

Grown-ups:
Can learners spot links between neighbouring questions?





CHECK 2



Name: _____

Date: _____

1. $10 \times 1 =$ _____

21. $9 \times 10 =$ _____

41. $25 \div 5 =$ _____

2. $7 \times 5 =$ _____

22. $5 \times 12 =$ _____

42. $24 \div 12 =$ _____

3. $10 \times 10 =$ _____

23. $5 \times 3 =$ _____

43. $25 \div 5 =$ _____

4. $5 \times 10 =$ _____

24. $6 \times 5 =$ _____

44. $90 \div 9 =$ _____

5. $5 \times 10 =$ _____

25. $1 \times 5 =$ _____

45. $90 \div 9 =$ _____

6. $10 \times 9 =$ _____

26. $4 \times 10 =$ _____

46. $110 \div 10 =$ _____

7. $5 \times 2 =$ _____

27. $2 \times 2 =$ _____

47. $10 \div 5 =$ _____

8. $6 \times 5 =$ _____

28. $2 \times 2 =$ _____

48. $5 \div 1 =$ _____

9. $2 \times 1 =$ _____

29. $5 \times 10 =$ _____

49. $8 \div 4 =$ _____

10. $3 \times 10 =$ _____

30. $12 \times 5 =$ _____

50. $100 \div 10 =$ _____

11. $10 \times 10 =$ _____

31. $10 \times 2 =$ _____

51. $40 \div 4 =$ _____

12. $10 \times 11 =$ _____

32. $5 \div 1 =$ _____

52. $8 \div 2 =$ _____

13. $10 \times 8 =$ _____

33. $50 \div 5 =$ _____

53. $50 \div 5 =$ _____

14. $9 \times 10 =$ _____

34. $24 \div 12 =$ _____

54. $10 \div 2 =$ _____

15. $5 \times 8 =$ _____

35. $45 \div 9 =$ _____

55. $40 \div 8 =$ _____

16. $10 \times 8 =$ _____

36. $120 \div 12 =$ _____

56. $25 \div 5 =$ _____

17. $10 \times 7 =$ _____

37. $20 \div 4 =$ _____

57. $40 \div 4 =$ _____

18. $10 \times 3 =$ _____

38. $2 \div 1 =$ _____

58. $20 \div 10 =$ _____

19. $5 \times 11 =$ _____

39. $40 \div 10 =$ _____

59. $120 \div 10 =$ _____

20. $6 \times 2 =$ _____

40. $90 \div 10 =$ _____

60. $14 \div 2 =$ _____

SCORE:
(5 minute limit)

/60

TIME TAKEN (optional)

MINUTES SECONDS

